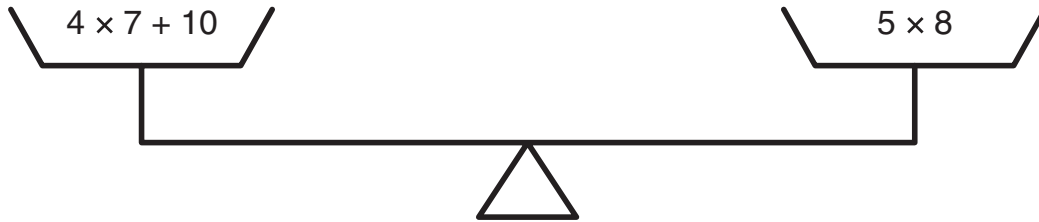
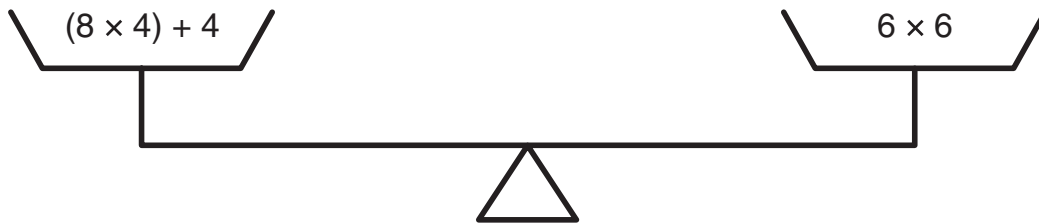


Name \_\_\_\_\_

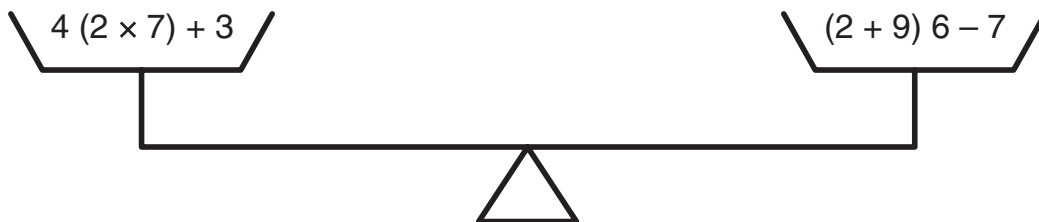
## Tilt or Balance—1



$$4 \times 7 + 10 \begin{matrix} < \\ = \\ > \end{matrix} 5 \times 8$$



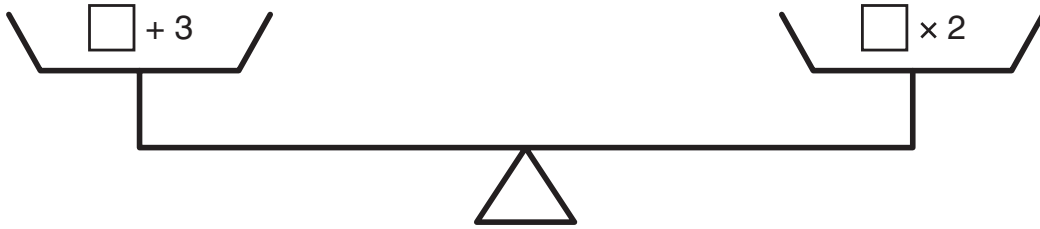
$$(8 \times 4) + 4 \begin{matrix} < \\ = \\ > \end{matrix} 6 \times 6$$



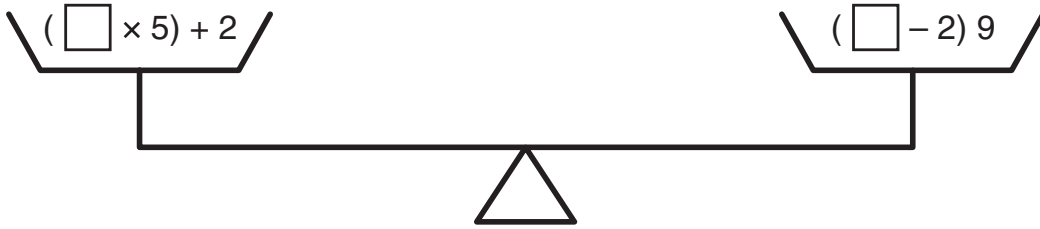
$$4 (2 \times 7) + 3 \begin{matrix} < \\ = \\ > \end{matrix} (2 + 9) 6 - 7$$

Name \_\_\_\_\_

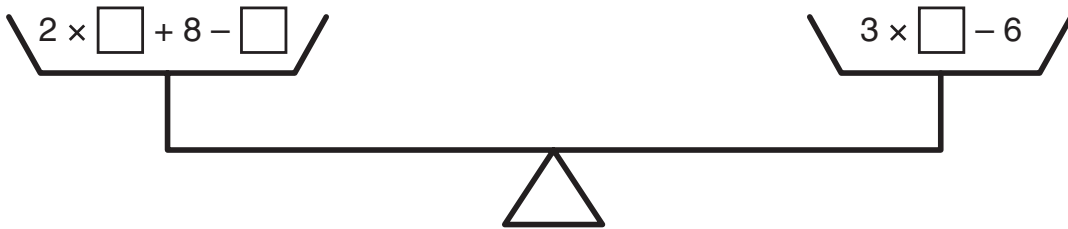
## Tilt or Balance—2



$$\square + 3 \quad \underline{\quad} \quad \square \times 2$$



$$(\square \times 5) + 2 \quad \underline{\quad} \quad (\square - 2) 9$$



$$2 \times \square + 8 - \square \quad \underline{\quad} \quad 3 \times \square - 6$$